

NOME: _____

DATA: _____

FICHA DE TRABALHO: AS HORAS

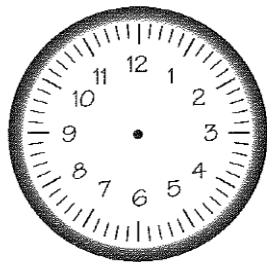
- Completa.

Um dia tem _____ horas.

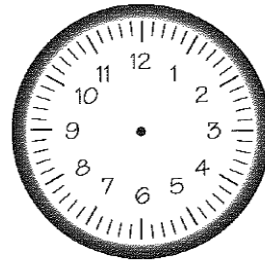
Uma hora tem _____ minutos.

Um minuto tem _____ segundos.

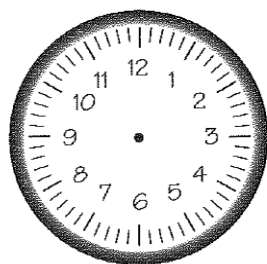
- Em cada relógio desenha os ponteiros de acordo com a hora indicada.



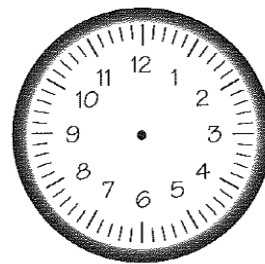
12 : 00




08 : 45




06 : 45



13 : 20

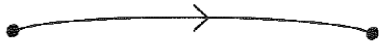
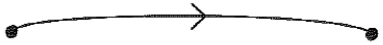
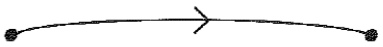
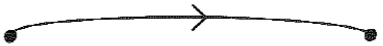
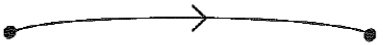
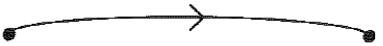


16 : 55




23 : 30


Completa.

1 h  _____ min
 $\frac{1}{2}$ h  _____ min
 $1\text{ h} + \frac{1}{2}\text{ h}$  _____ min
2 h  _____ min
 $2\text{ h} + \frac{1}{2}\text{ h}$  _____ min
3 h  _____ min


Escreve a hora marcada em cada relógio.




_____ h _____ min



_____ h _____ min



_____ h _____ min



_____ h _____ min